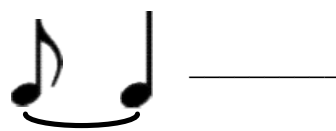
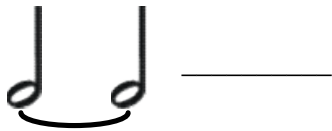

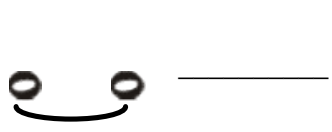
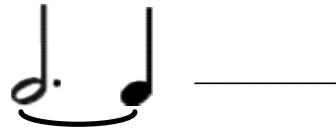
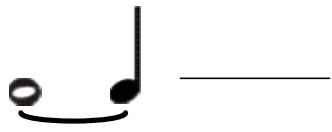
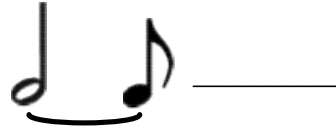
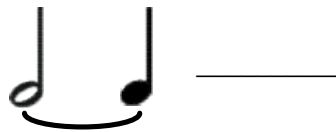
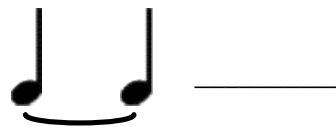


Ties and Slurs II

1. Write the number of beats that each pair of tied notes gets.



2. Draw the note that would equal the number of beats that each pair of tied notes gets.



3. Draw circles around the ties and draw squares around the slurs.



4. Explain what you do when there is a slur. Explain what you do when there is a tie.